

NAME _____

SCORE _____

WORDS AND SYMBOLS

PATTERNS

1

Sam has an even number. Circle Sam.



2



23, 22, 21, __, __, 18

ADD AND SUBTRACT

ORDINAL AND CARDINAL NUMBERS

3

29 caps
+28 caps

40 balls
-34 balls

4



5



BASIC FACTS

$$\begin{array}{r} 3 \\ +4 \\ \hline \end{array}$$


$$\begin{array}{r} 9 \\ +9 \\ \hline \end{array}$$

$$\begin{array}{r} 7 \\ +8 \\ \hline \end{array}$$

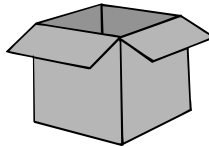
$$\begin{array}{r} 3 \\ +5 \\ \hline \end{array}$$

$$\begin{array}{r} 7 \\ -5 \\ \hline \end{array}$$

6



PROBLEM SOLVING



Sam has nine cats in all.
How many are in the box?

7



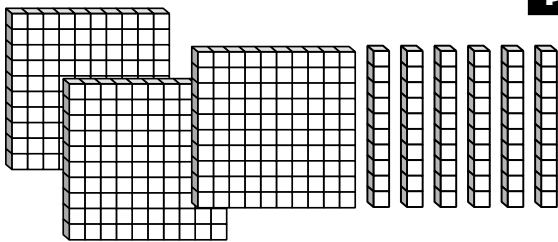
MONEY

Who has more money?

Use > or <.




8



PLACE VALUE

There are _____ blocks.
 _____ hundreds + _____ tens + _____ one
 _____ + _____ + _____ = _____

9



TIME

It is _____ minutes after 4 o'clock.

10

FRACTIONS AND GEOMETRY

Which has $\frac{1}{2}$ colored?

