




Name _____

Score _____

1. Words and Concepts

after Pam





2. Skip Counting Patterns

2	4	6	_____	_____	12	_____	_____	18	_____
---	---	---	-------	-------	----	-------	-------	----	-------

3. Money

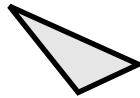
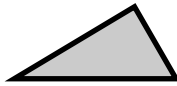


4. Time


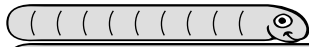


6 o'clock

5. Geometry



6. Measurement



_____ cm - _____ cm = _____


7. Addition Stories and Facts

$$\begin{array}{r} 5 \\ + 4 \\ \hline \end{array} \quad \begin{array}{r} 4 \\ + 5 \\ \hline \end{array} \quad \begin{array}{r} 6 \\ + 0 \\ \hline \end{array} \quad \begin{array}{r} 0 \\ + 6 \\ \hline \end{array}$$

8. Before and After


_____ 35 _____

9. Subtraction Stories and Facts



_____ - _____ = _____
There are _____ more dolphins.

10. Counting, Place Value, or Temperature



How many? _____