

DROPS IN THE BUCKET

MATH LEVEL R

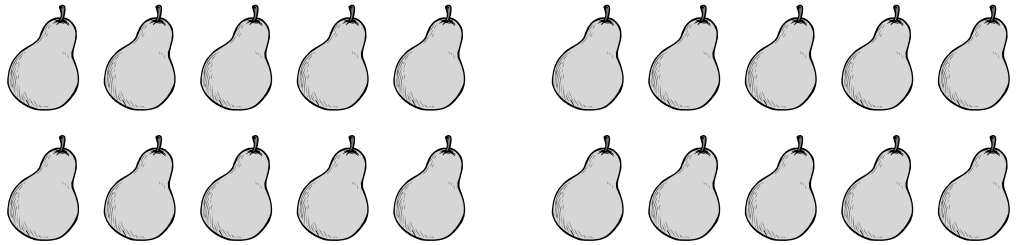
NUMBER 59

COPYRIGHT © MARY JO HAND

THE STUDENT WILL DRAW A RING AROUND ANY FIFTEEN PEARS AND PUT AN X ON ANY THREE PEARS.

FOLLOW DIRECTIONS - COUNT

○ 15
× 3

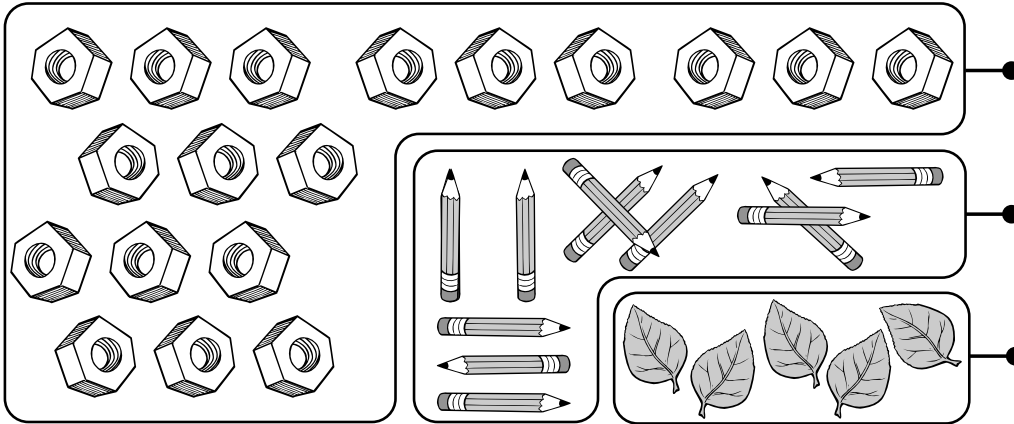


SEQUENCES




___ 16 17 18 19 ___

COUNT & MATCH SETS TO NUMERALS



- 19
- 18
- 11
- 10
- 5
- 4

ADD & SUBTRACT



___ + ___ = ___



___ - ___ = ___

LOGICAL ORDER: CUT AND PASTE THE PICTURES IN A LOGICAL ORDER. SOMETIMES MORE THAN ONE LOGICAL ORDER IS POSSIBLE AND CORRECT!

→ → → → →

✂