

DROPS IN THE BUCKET

MATH LEVEL R


NUMBER 1

COPYRIGHT © MARY JO HAND

THE STUDENT WILL PUT AN X ON ANY THREE PIGS AND DRAW A RING AROUND ANY FOUR PIGS.

FOLLOW DIRECTIONS - COUNT

× 3
○ 4



SEQUENCES



0


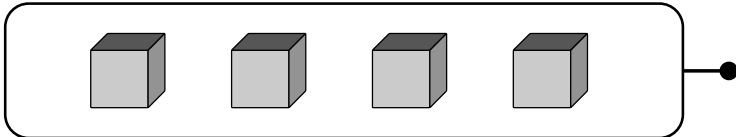
1

2

3

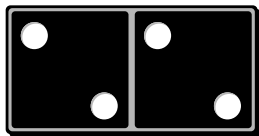
4

COUNT & MATCH SETS TO NUMERALS



- 5
- 4
- 3
- 2
- 1
- 0

ADD & SUBTRACT



$2 + 2 = \underline{\quad}$



$5 - 1 = \underline{\quad}$

LOGICAL ORDER: CUT AND PASTE THE PICTURES IN A LOGICAL ORDER. SOMETIMES MORE THAN ONE LOGICAL ORDER IS POSSIBLE AND CORRECT!

Scissors icon